


# Telling Time Worksheet


SmartOnlineGames.com

Name: \_\_\_\_\_ Date: \_\_\_\_\_


Write the time shown on each clock.




\_\_\_ : \_\_\_




\_\_\_ : \_\_\_




\_\_\_ : \_\_\_




\_\_\_ : \_\_\_




\_\_\_ : \_\_\_




\_\_\_ : \_\_\_




\_\_\_ : \_\_\_




\_\_\_ : \_\_\_




\_\_\_ : \_\_\_



\_\_\_ : \_\_\_



\_\_\_ : \_\_\_



\_\_\_ : \_\_\_